

# Table of Contents

## Introduction

Welcome Letter .....	4
Helpful Family Resources .....	5

## Weekly Activities

Week 1 Activities .....	13
Week 2 Activities .....	23
Week 3 Activities .....	33
Week 4 Activities .....	43
Week 5 Activities .....	53
Week 6 Activities .....	63
Week 7 Activities .....	73
Week 8 Activities .....	83
Week 9 Activities .....	93

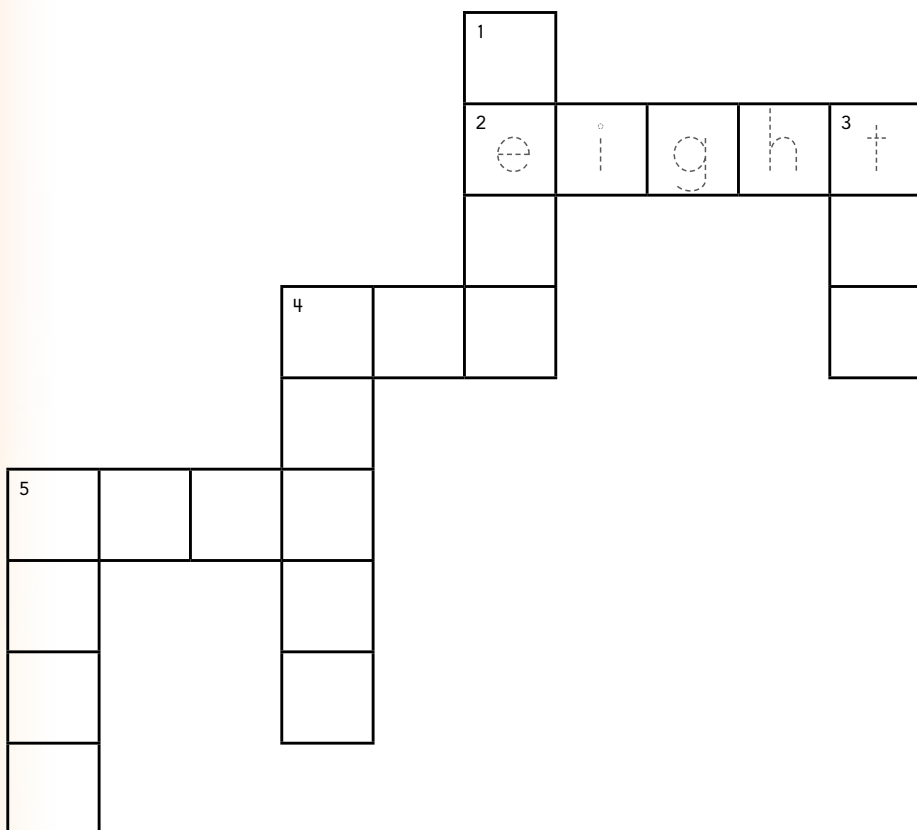
## Appendices

Appendix A: Activity Cards .....	103
Appendix B: Answer Key .....	119
Appendix C: Parent Handbook .....	123



# Number Crossword

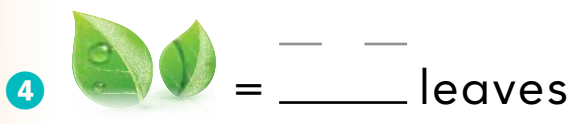
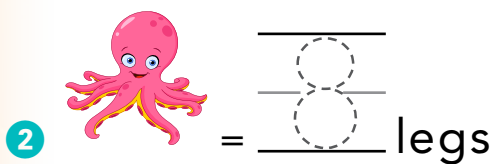
**Directions:** Solve the clues. Complete the crossword puzzle using the Answer Box.




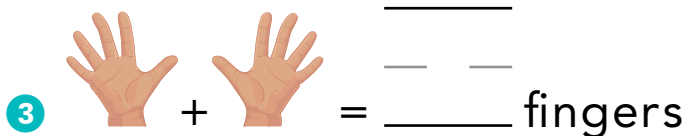
## Answer Box

zero (0)  
four (4)  
eight (8)  
five (5)  
two (2)  
ten (10)  
three (3)

### Across



### Down



# Shape Hunt

**Directions:** Find an example in your house of each shape. Draw a picture of what you find.


1 sphere



2 cone



3 rectangular prism




4 cylinder



5 pyramid



6 cube




## How Much Fruit?

Kevin is buying fruit. He buys 12 bananas. He already has 8 apples at home. He wants to have an equal number of bananas and apples. How many apples should he buy?



**Show It:** Draw a picture showing the problem.



**Solve It:** Write a number sentence.




**Explain It:** Explain how you solved the problem.

## More Than One?


**Directions:** Circle the right words for the problem.

1




bed    beds

2




apple    apples

3



can    cans

4



nut    nuts