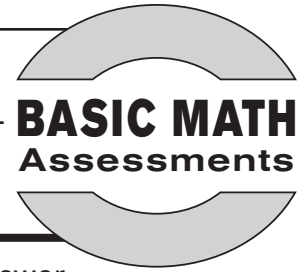


Name: _____

Date: _____

Pre Assessment A



Use before completing pages 16–25 of *Basic Math Practice: Number Operations*.

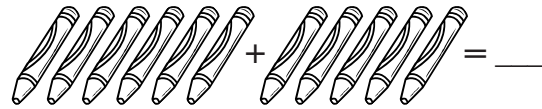
Directions: Read each problem. Fill in the circle for the correct answer.

1)



- 6 crayons
- 4 crayons
- 3 crayons
- 7 crayons

2)



- 10 crayons
- 11 crayons
- 13 crayons
- 12 crayons

3) Use the number line to solve the problem.



$$8 + 2 = \underline{\quad}$$

- 6
- 12
- 10
- 8

4) Use the number line to solve the problem.



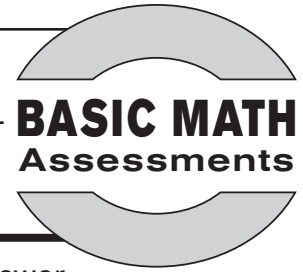
$$3 + 6 = \underline{\quad}$$

- 9
- 7
- 11
- 13

Name:

Date:

Pre Assessment A, *continued*



Use before completing pages 16–25 of *Basic Math Practice: Number Operations*.

Directions: Read each problem. Fill in the circle for the correct answer.

5)

$$\begin{array}{r} 5 \\ +9 \\ \hline \end{array}$$

- 14
- 15
- 13
- 16

6)

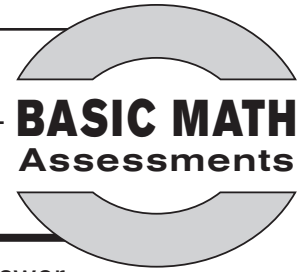
$$\begin{array}{r} 8 \\ +7 \\ \hline \end{array}$$

- 11
- 13
- 12
- 15

Name: _____


Date: _____

Check Up



Directions: Read each problem. Fill in the circle for the correct answer.

1)



- 6 stars
- 8 stars
- 9 stars
- 2 stars

2) Use the number line to solve the problem.



$$6 + 4 = \underline{\quad}$$

- 10
- 8
- 6
- 12

3) $3 + 8 = \underline{\quad}$

- 10
- 15
- 13
- 11

4) $9 + 6 = \underline{\quad}$

- 16
- 14
- 13
- 15