

Addition

Grades 1-3

**Written by Ruth Solski
Illustrated by S&S Learning Materials**

ISBN 1-55035-722-0

Copyright 2002

Revised January 2006

All Rights Reserved * Printed in Canada

Permission to Reproduce

Permission is granted to the individual teacher who purchases one copy of this book to reproduce the student activity material for use in his/her classroom only. Reproduction of these materials for an entire school or for a school system, or for other colleagues or for commercial sale is strictly prohibited. No part of this publication may be transmitted in any form or by any means, electronic, mechanical, recording or otherwise without the prior written permission of the publisher. "We acknowledge the financial support of the Government of Canada through the Book Publishing Industry Development Program (BPIDP) for this project."

Published in the United States by:
On the Mark Press
3909 Witmer Road PMB 175
Niagara Falls, New York
14305
www.onthemarkpress.com

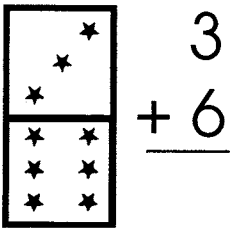
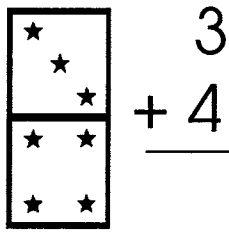
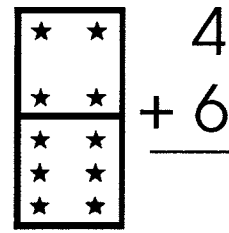
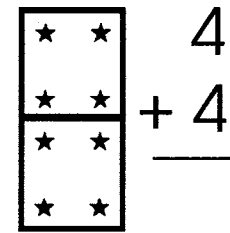
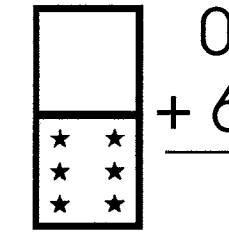
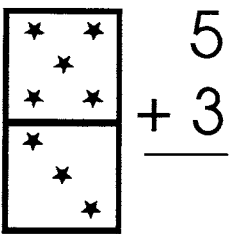
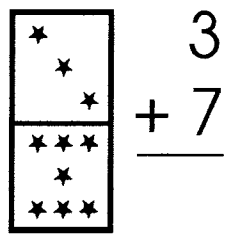
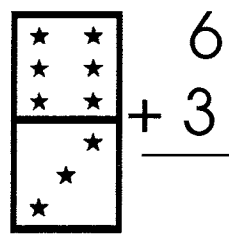
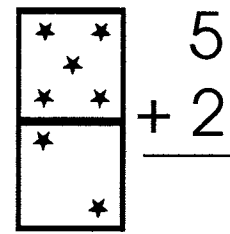
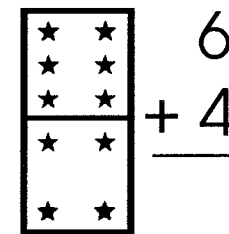
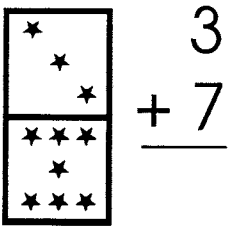

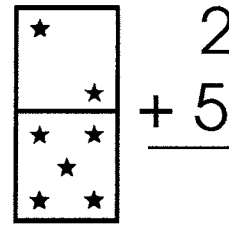
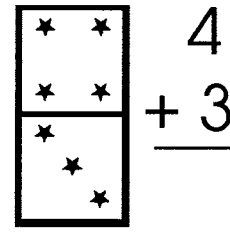
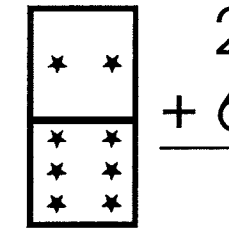
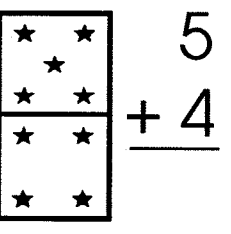
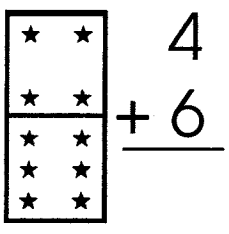
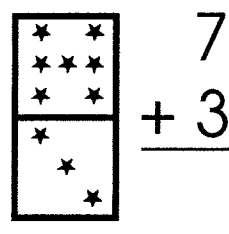
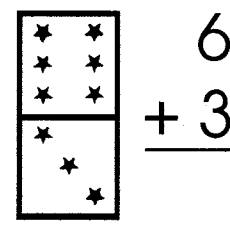
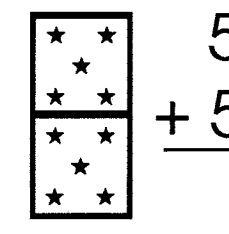
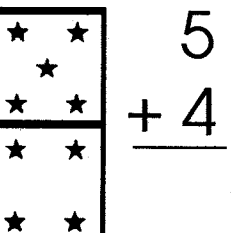
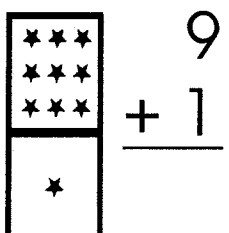
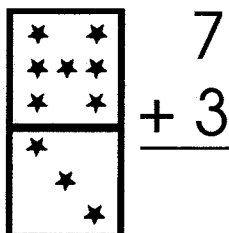
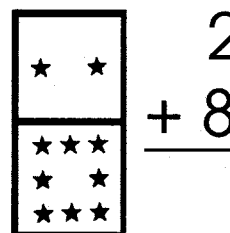
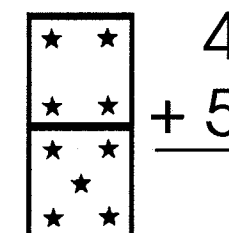
© On the Mark Press • S&S Learning Materials

Published in Canada by:
S&S Learning Materials
15 Dairy Avenue
Napanee, Ontario
K7R 1M4
www.sslearning.com

OTM-2504 • SSY1-04 Addition


Addition Practice

Add the numerals to find the sum.


A					
B					
C					
D					
E					

Skill: Finding the Sum of One Digit Numbers.

Addition Practice




Complete the domino pattern to find the missing addend.




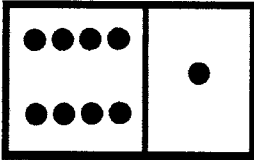
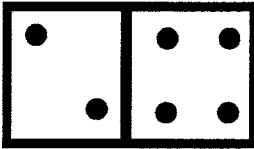
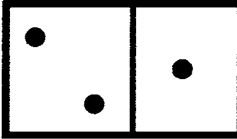
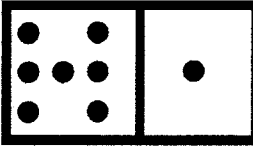
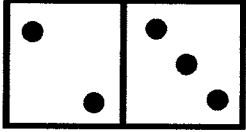
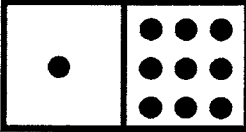
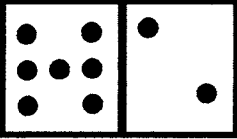
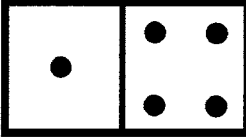
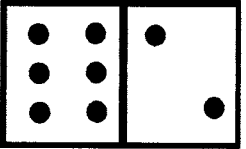
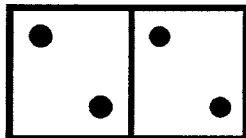
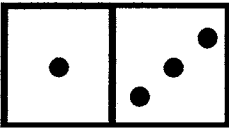
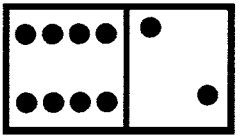
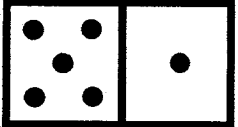
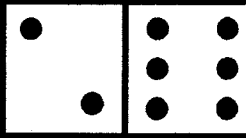

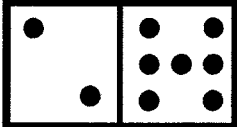
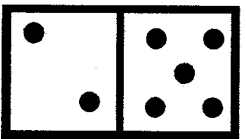
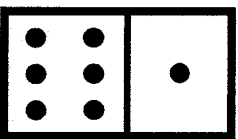
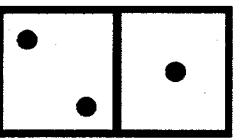
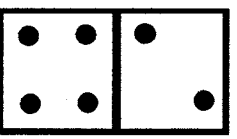
A	$\begin{array}{r} \text{6 dots} \\ + \square \\ \hline 9 \end{array}$	$\begin{array}{r} \text{4 dots} \\ + \square \\ \hline 6 \end{array}$	$\begin{array}{r} \square \\ + 1 \\ \hline 8 \end{array}$	$\begin{array}{r} \square \\ + 2 \\ \hline 5 \end{array}$
B	$\begin{array}{r} \square \\ + 2 \\ \hline 9 \end{array}$	$\begin{array}{r} \text{1 dot} \\ + \square \\ \hline 3 \end{array}$	$\begin{array}{r} \square \\ + 1 \\ \hline 5 \end{array}$	$\begin{array}{r} \text{1 dot} \\ + \square \\ \hline 7 \end{array}$
C	$\begin{array}{r} \text{8 dots} \\ + \square \\ \hline 10 \end{array}$	$\begin{array}{r} \text{5 dots} \\ + \square \\ \hline 6 \end{array}$	$\begin{array}{r} \square \\ + 2 \\ \hline 10 \end{array}$	$\begin{array}{r} \text{7 dots} \\ + \square \\ \hline 9 \end{array}$
D	$\begin{array}{r} \square \\ + 5 \\ \hline 7 \end{array}$	$\begin{array}{r} \square \\ + 3 \\ \hline 10 \end{array}$	$\begin{array}{r} \text{5 dots} \\ + \square \\ \hline 9 \end{array}$	$\begin{array}{r} \text{8 dots} \\ + \square \\ \hline 8 \end{array}$
E	$\begin{array}{r} \text{6 dots} \\ + \square \\ \hline 10 \end{array}$	$\begin{array}{r} \square \\ + 3 \\ \hline 8 \end{array}$	$\begin{array}{r} \square \\ + 1 \\ \hline 6 \end{array}$	$\begin{array}{r} \text{3 dots} \\ + \square \\ \hline 5 \end{array}$

Addition Practice



Write the number sentence for each domino.



<p>A</p>  <p>___ + ___ = ___</p>	 <p>___ + ___ = ___</p>	 <p>___ + ___ = ___</p>	 <p>___ + ___ = ___</p>
<p>B</p>  <p>___ + ___ = ___</p>	 <p>___ + ___ = ___</p>	 <p>___ + ___ = ___</p>	 <p>___ + ___ = ___</p>
<p>C</p>  <p>___ + ___ = ___</p>	 <p>___ + ___ = ___</p>	 <p>___ + ___ = ___</p>	 <p>___ + ___ = ___</p>
<p>D</p>  <p>___ + ___ = ___</p>	 <p>___ + ___ = ___</p>	 <p>___ + ___ = ___</p>	 <p>___ + ___ = ___</p>
<p>E</p>  <p>___ + ___ = ___</p>	 <p>___ + ___ = ___</p>	 <p>___ + ___ = ___</p>	 <p>___ + ___ = ___</p>